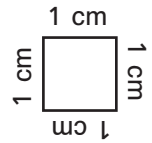
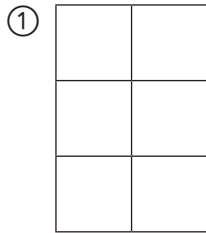


# Umfang

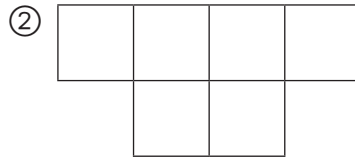
Der Weg um einen Quadratzentimeter ist der Umfang.  
Er ist 4 cm lang (1 cm + 1 cm + 1 cm + 1 cm).




**1** Berechne den Umfang der verschiedenen Figuren (1 Kästchen = 1 cm).



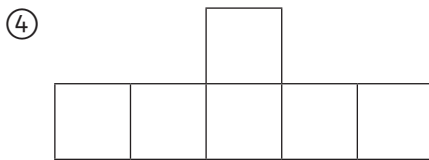
\_\_\_\_\_ cm




\_\_\_\_\_ cm



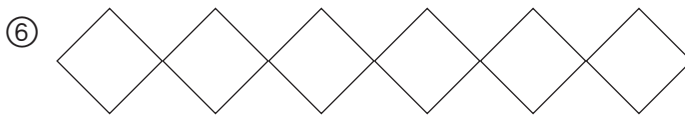
\_\_\_\_\_ cm



\_\_\_\_\_ cm




\_\_\_\_\_ cm



\_\_\_\_\_ cm

**2** Miss den Umfang der Flächen.



Figur	Umfang
A	
B	
C	
D	
E	
F	